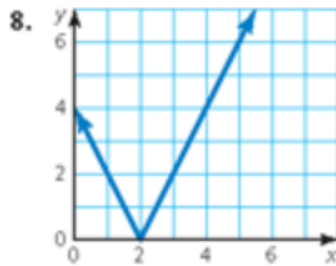
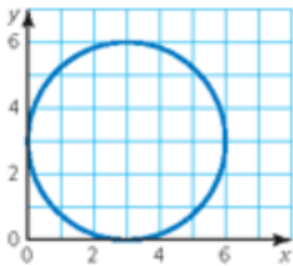
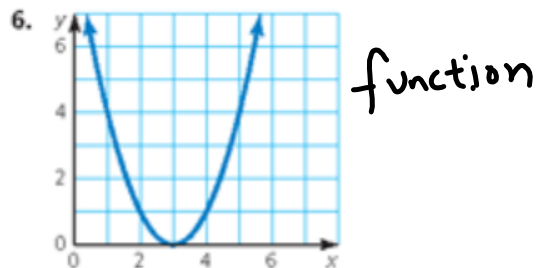
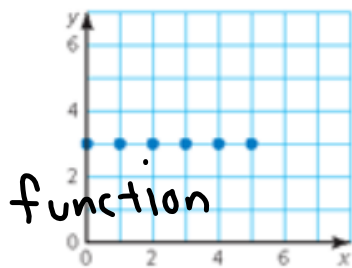
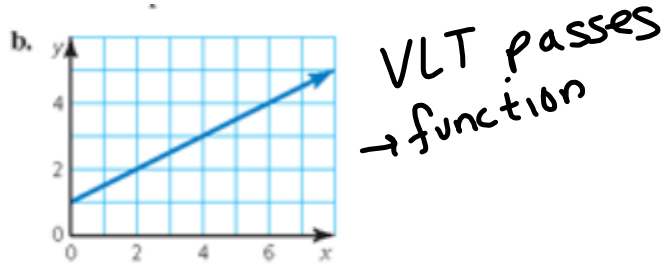
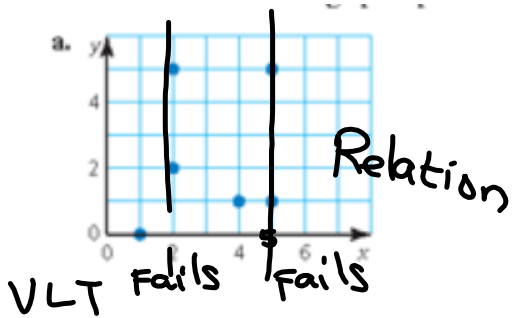
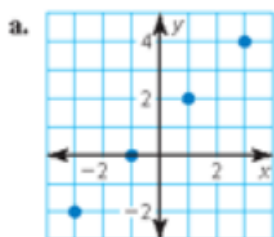


## Ex 2 Function or Relation

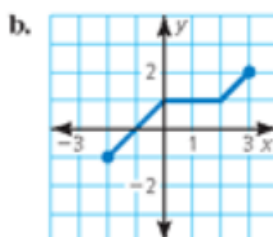


## Ex 3 Domain and Range



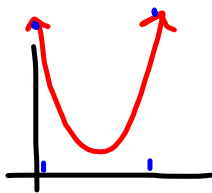
x  
y

$$\text{Domain: } \{-3, -1, 1, 3\}$$
$$\text{Range: } \{-2, 0, 2, 4\}$$



$$\text{Domain: } -2 \leq x \leq 3$$
$$\text{Range: } -1 \leq y \leq 2$$

b)



$$D: \text{  ~~} 0.5 \leq x \leq 5.5 \text{ 
$$-\infty \leq x \leq \infty$$~~$$

$$R: 0 \leq y \leq \infty$$